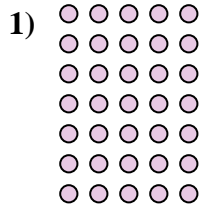
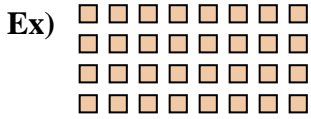




Write each array as a multiplication problem and solve.



Answers

Ex. 4 • 8 = 32

1. _____

2. _____

3. _____

4. _____

5. _____

6. _____

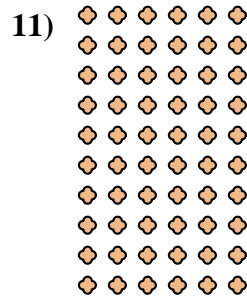
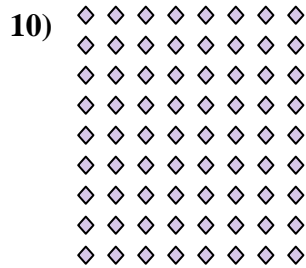
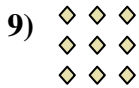




7. _____

8. _____

9. _____

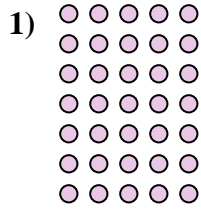
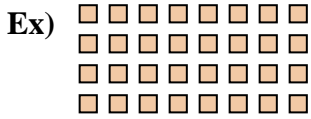
10. _____

11. _____





Write each array as a multiplication problem and solve.



Answers

Ex. 4 • 8 = 32

1. 7 • 5 = 35

2. 8 • 2 = 16

3. 4 • 7 = 28

4. 8 • 9 = 72

5. 7 • 7 = 49

6. 10 • 5 = 50

7. 9 • 5 = 45

8. 6 • 5 = 30

9. 3 • 3 = 9

10. 9 • 8 = 72

11. 10 • 6 = 60

