
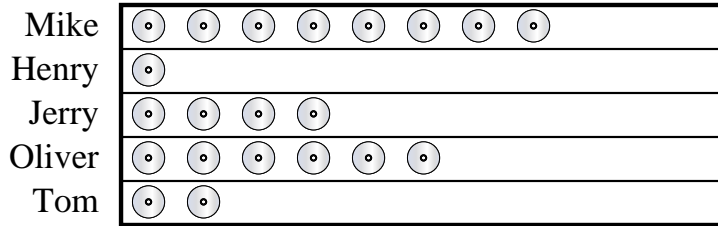


**Solve each problem.**

Mike and his friends were comparing the number of movies they owned. They organized the information in the pictograph below.


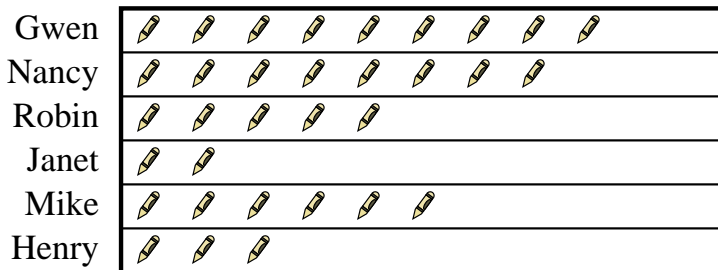
**DVDs owned** = 8 DVDs

- 1) Who owned the largest number of DVDs?
- 2) Who owned the fewest DVDs?
- 3) Who had more DVDs, Tom or Jerry?
- 4) How many DVDs did Mike own?
- 5) How many DVDs did Tom own?

**Answers**

1. \_\_\_\_\_
2. \_\_\_\_\_
3. \_\_\_\_\_
4. \_\_\_\_\_
5. \_\_\_\_\_
6. \_\_\_\_\_
7. \_\_\_\_\_
8. \_\_\_\_\_
9. \_\_\_\_\_
10. \_\_\_\_\_

Several students were helping to decorate the school halls by drawing pictures to hang up. The pictograph below shows the number of pictures each student drew.

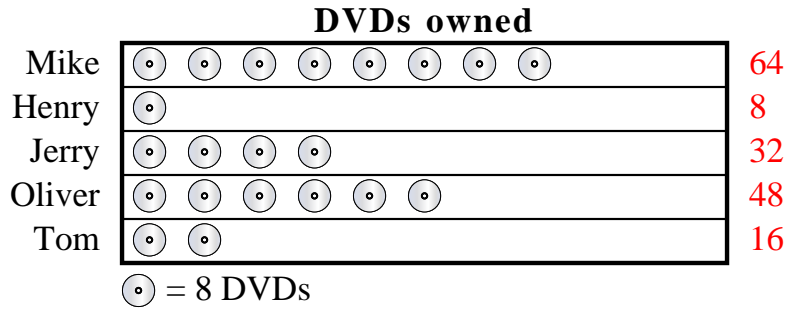
**Pictures Drawn** = 4 pictures drawn

- 6) Who drew the most pictures?
- 7) Who drew the fewest pictures?
- 8) Did Henry or Robin draw more pictures?
- 9) How many pictures did Robin draw?
- 10) How many pictures did Gwen draw?



Solve each problem.

Mike and his friends were comparing the number of movies they owned. They organized the information in the pictograph below.

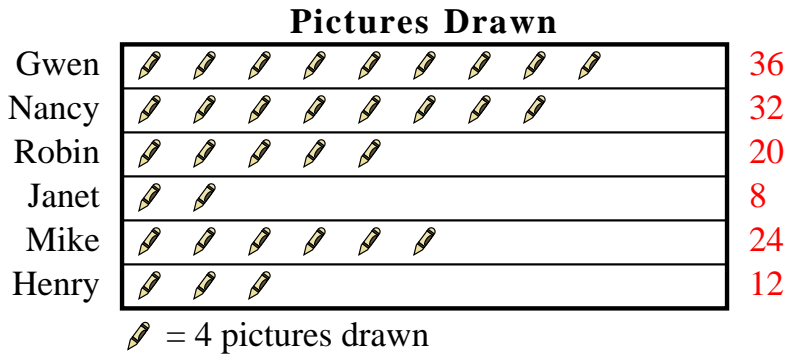


- 1) Who owned the largest number of DVDs?
- 2) Who owned the fewest DVDs?
- 3) Who had more DVDs, Tom or Jerry?
- 4) How many DVDs did Mike own?
- 5) How many DVDs did Tom own?

**Answers**

1. **Mike**
2. **Henry**
3. **Jerry**
4. **64**
5. **16**
6. **Gwen**
7. **Janet**
8. **Robin**
9. **20**
10. **36**

Several students were helping to decorate the school halls by drawing pictures to hang up. The pictograph below shows the number of pictures each student drew.



- 6) Who drew the most pictures?
- 7) Who drew the fewest pictures?
- 8) Did Henry or Robin draw more pictures?
- 9) How many pictures did Robin draw?
- 10) How many pictures did Gwen draw?