
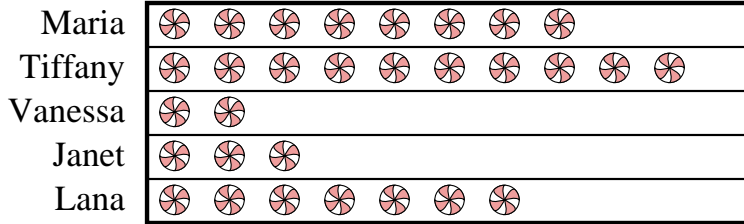


**Solve each problem.**

Maria and her friends were comparing the amount of candy they received on Halloween. They recorded their information in the pictograph below.

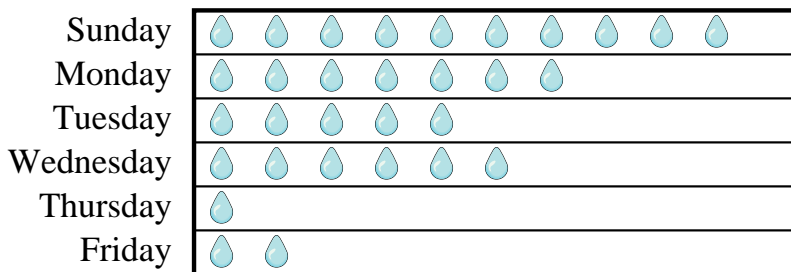
Candy Haul = 8 kilograms of candy

- 1) Who got the most candy?
- 2) Who got the least amount of candy?
- 3) Who got more candy, Janet or Lana?
- 4) How many kilograms of candy did Lana get?
- 5) How many kilograms of candy did Janet get?

Answers

1. _____
2. _____
3. _____
4. _____
5. _____
6. _____
7. _____
8. _____
9. _____
10. _____

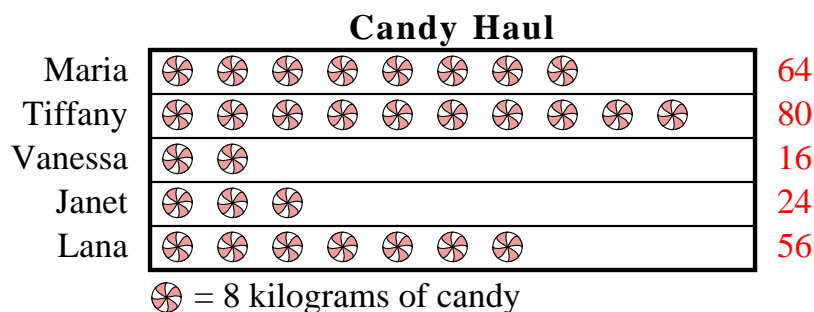
Mr. Sanders class was performing an experiment to see which day of the week had the most rain. His class recorded their information in the pictograph below.

Millimeters of Rain = 3 Millimeters of rain

- 6) Which day had the most rain?
- 7) Which day had the least rain?
- 8) Did it rain more on Friday or Tuesday?
- 9) How much rain was there on Monday?
- 10) How much rain was there on Tuesday?

**Solve each problem.**

Maria and her friends were comparing the amount of candy they received on Halloween. They recorded their information in the pictograph below.

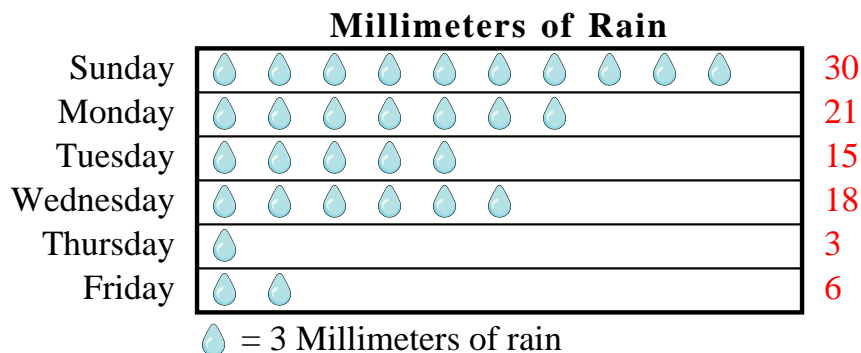


- Who got the most candy?
- Who got the least amount of candy?
- Who got more candy, Janet or Lana?
- How many kilograms of candy did Lana get?
- How many kilograms of candy did Janet get?

Answers

- Tiffany**
- Vanessa**
- Lana**
- 56**
- 24**
- Sunday**
- Thursday**
- Tuesday**
- 21**
- 15**

Mr. Sanders class was performing an experiment to see which day of the week had the most rain. His class recorded their information in the pictograph below.



- Which day had the most rain?
- Which day had the least rain?
- Did it rain more on Friday or Tuesday?
- How much rain was there on Monday?
- How much rain was there on Tuesday?