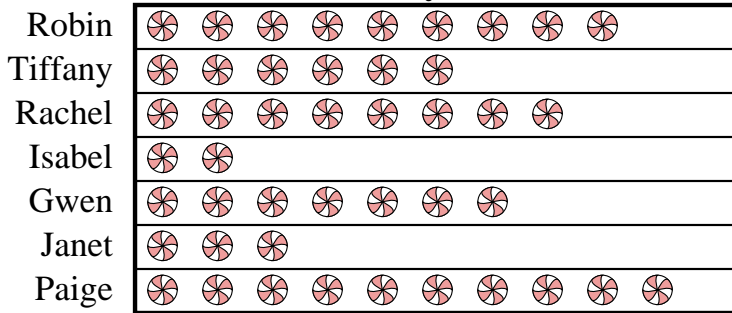




Solve each problem.

Robin and her friends were comparing the amount of candy they received on Halloween. They recorded their information in the pictograph below.

**Candy Haul**



 = 9 kilograms of candy

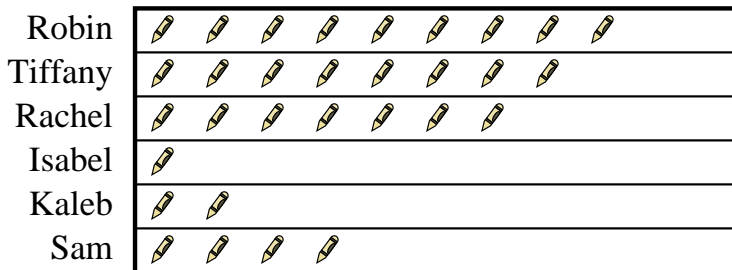
- 1) Who got the most candy?
- 2) Who got the least amount of candy?
- 3) Who got more candy, Janet or Tiffany?
- 4) How many kilograms of candy did Tiffany get?
- 5) How many kilograms of candy did Janet get?


**Answers**

1. \_\_\_\_\_
2. \_\_\_\_\_
3. \_\_\_\_\_
4. \_\_\_\_\_
5. \_\_\_\_\_
6. \_\_\_\_\_
7. \_\_\_\_\_
8. \_\_\_\_\_
9. \_\_\_\_\_
10. \_\_\_\_\_

Several students were helping to decorate the school halls by drawing pictures to hang up. The pictograph below shows the number of pictures each student drew.

**Pictures Drawn**



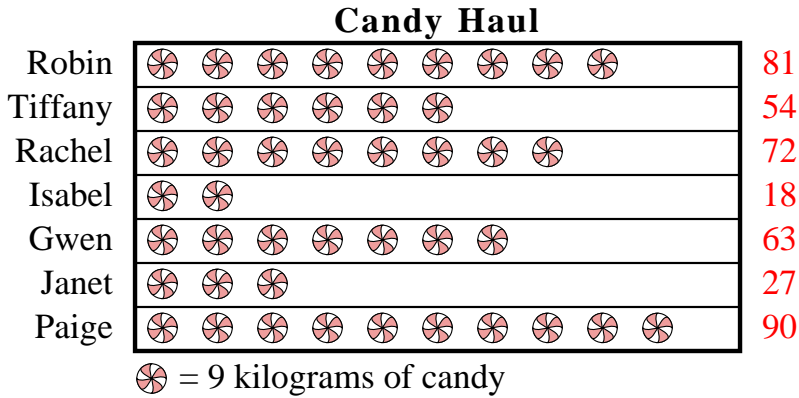
 = 6 pictures drawn

- 6) Who drew the most pictures?
- 7) Who drew the fewest pictures?
- 8) Did Kaleb or Sam draw more pictures?
- 9) How many pictures did Robin draw?
- 10) How many pictures did Isabel draw?



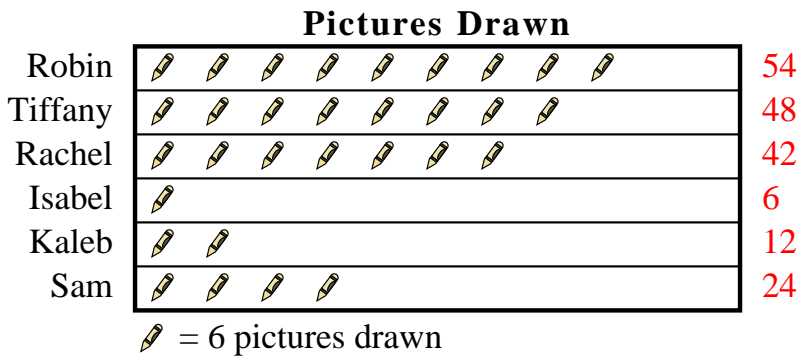
Solve each problem.

Robin and her friends were comparing the amount of candy they received on Halloween. They recorded their information in the pictograph below.



- 1) Who got the most candy?
- 2) Who got the least amount of candy?
- 3) Who got more candy, Janet or Tiffany?
- 4) How many kilograms of candy did Tiffany get?
- 5) How many kilograms of candy did Janet get?

Several students were helping to decorate the school halls by drawing pictures to hang up. The pictograph below shows the number of pictures each student drew.



- 6) Who drew the most pictures?
- 7) Who drew the fewest pictures?
- 8) Did Kaleb or Sam draw more pictures?
- 9) How many pictures did Robin draw?
- 10) How many pictures did Isabel draw?

### Answers

1. **Paige**
2. **Isabel**
3. **Tiffany**
4. **54**
5. **27**
6. **Robin**
7. **Isabel**
8. **Sam**
9. **54**
10. **6**