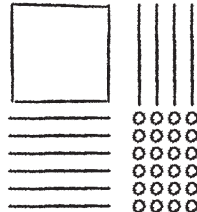
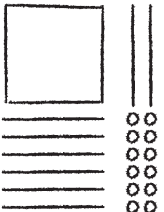
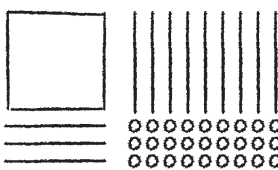
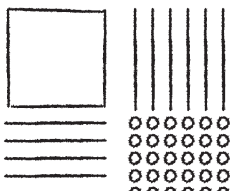


Dividing It Up

Write two related division sentences for each quick picture.

<p>1.</p>  <p>_____</p> <p>_____</p>	<p>2.</p>  <p>_____</p> <p>_____</p>
<p>3.</p>  <p>_____</p> <p>_____</p>	<p>4.</p>  <p>_____</p> <p>_____</p>

5. Write Math Explain how you can use multiplication to check that your division sentences for Exercises 1–4 are correct.
