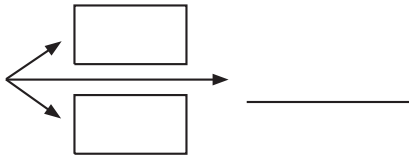
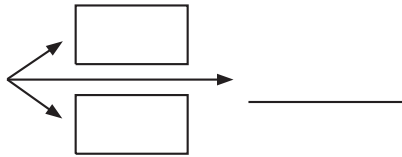


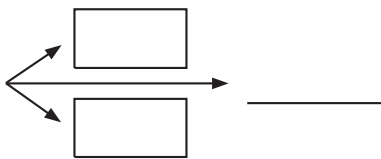
Name _____

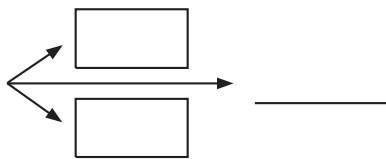
Quotient Correction

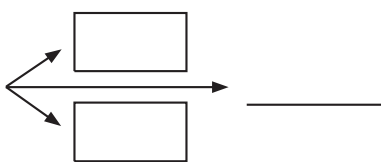
For each problem, find two estimates. Write the higher estimate in the top box and write the lower estimate in the bottom box. Use one estimate to place the first digit. Divide and adjust the quotient as needed. Write your answer on the line provided.

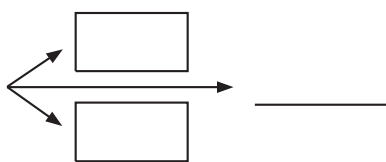
1. $6 \overline{)3,387}$ 

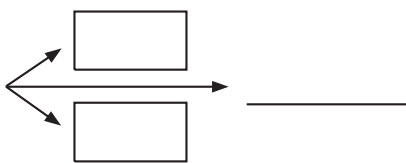
2. $9 \overline{)1,346}$ 

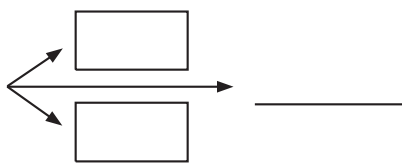
3. $77 \overline{)400}$ 

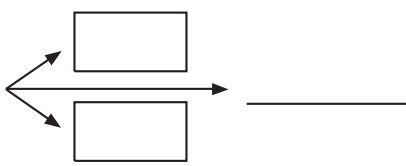
4. $41 \overline{)296}$ 

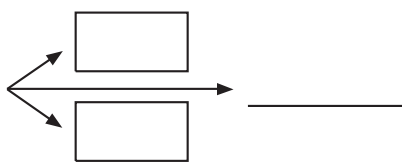
5. $92 \overline{)378}$ 

6. $3 \overline{)4,509}$ 

7. $28 \overline{)1,255}$ 

8. $50 \overline{)729}$ 

9. $84 \overline{)2,550}$ 

10. $32 \overline{)656}$ 

11.  **Write Math** Explain the strategy you used to solve Exercise 2.
